

Round 3) 1st Week Tues. April 14 - Friday April 17

T- READ p. 92 do p. 93

W- p. 94

R- p. 95

F- p. 96 > graded

Note: Please read all the "blue" parts very carefully before you do the work. 😊

Round 3) 2nd Week Monday April 20 - Friday April 24

M- p. 97

T- p. 98 > Think A graded

W- p. 99

R- p. 100

F- p. 101 > graded

Round 3) 3rd Week Monday, April 27 - Friday May 1st

M- p. 102

T- p. 103

W- p. 104

R- p. 105 > Think B graded

F- p. 106

✿ 5th GRADE LANGUAGE (Miss you 5th grade! 😊
(Mrs. SanRocco))

April 14

Fifth Grade at Home

Bible – The book of Philippians – Read Ch. 4

Memory Verse – *Philippians 4:6*

Do not be anxious about anything, but in everything by prayer and supplication with thanksgiving let your requests be made known to God.

Reading – The *Black Stallion* “TEST”

Math – page 325 – Converting measures – Remember to use AND SHOW your steps

1. Multiply or divide? Going from small to large = divide. Going from large to small = multiply.
2. What # do you multiply or divide by? How many ft in a yard, inch in a foot, cups in a pint, etc.
3. Do the math – Multiply or divide the numbers

Example: 6lbs. = _____ oz.

1. X (Lbs. are larger than oz.. so I multiply)
2. 16 (there are 16 oz.. in 1 lb.)
3. $6 \times 16 = \underline{\hspace{2cm}}$ oz.

Social St. – Ch. 8 Read p. 121-124 & do Comp. Check 8A

Science – Chapter 4 – Treasures of the Earth – Read p. 95-96 & do Comp. Check 4.1

PHILIPPIANS

AT-A-GLANCE



N.T. BOOK #11



AUTHOR: APOSTLE PAUL



WRITTEN: 60-62 AD

Old Testament: 39 Books

New Testament: 27 Books

CLAIMS TO FAME: Considered to be one of the most encouraging epistles for those under trial

PROBLEMS OR ISSUES THIS BOOK IS ADDRESSING:

- The Apostle Paul did not write Philippians to address a crisis, like he did with other letters. Instead, he wrote to express his appreciation and affection for the believers in the church of Philippi. More than any other church, the people offered Paul support for his ministry in payments, gifts, and comfort.

MOST FAMOUS VERSES:

Do not be anxious about anything, but in every situation, by prayer and petition, with thanksgiving, present your requests to God.
Philippians 4:6

I can do all this through him who gives me strength.
Philippians 4:13

"He who began a good work in you will perfect it until the day of Christ Jesus"
Philippians 1:6

Important Points about the Book:

- This book begins with Paul describing his imprisonment and the situation in Rome. He is under house arrest while writing this and three other epistles. He explains that he believes he will be delivered, and goes on to encourage the church of Philippi to live lives worthy of the gospel. Lastly, he explains that he is sending Timothy to them and wishes them blessings and peace, warning against legalism.

Alec changes as the book goes from chapter 1 to chapter 18. Describe the differences between Alec at the beginning of the book to the Alec we have at the end of the book.

The Black changes as well. Describe the differences between The Black that Alec sees for the first time as the men load him onto the ship the first time to The Black at the end of the book.

Vocabulary

Write the definitions to the following words from *The Black Stallion*:

GNARLED:

CLENCHED:

REMNANTS:

ILLUMINATED:

NEGLECT:

UNTAMABLE:

SAVAGELY:

BRIDLE:

QUIZZICALLY:

MISSIONARY:

Converting Measures

1. 7 ft. = _____ in.

2. 3 mi. = _____ ft.

3. 17 km = _____ m

4. 21 yd. = _____ ft.

5. 48 oz. = _____ lb.

6. 32 c. = _____ pt.

7. 16 bu. = _____ pk.

8. 60 mo. = _____ yr.

9. 5 lb. - 6 oz. = _____ oz.

10. 9 m + 6 cm = _____ cm

11. 4 gal. + 3 qt. = _____ qt.

12. 27 ft. - 4 yd. = _____ yd.

13. 7 gal. + 16 qt. = _____ gal.

14. 200 dm + 5 m = _____ m

15. 48 in. + 5 yd. - 7 ft. = _____ ft.

16. 5 kg - 3,000 g = _____ g

Old World History - Comprehension Check 8A

1. What is the highest peak in Africa?

2. What African island is the fourth largest island in the world?

3. Which kingdom was the greatest ancient civilization in the interior of Africa?

4. What African nation had a strong Christian influence in new Testament times? Why?

5. What special fact do we know about the Ethiopian Eunuch?

6. What was Africa's first and greatest Christian kingdom?

7. Which king had churches carved out of solid rock?

Science – Comprehension Check 4.1

1. Define the following:

GEOLOGIST:

MAGMA:

LAVA:

2. Name the three layers of the earth.

3. What are the two parts of the core called?

April 15

Fifth Grade at Home

Bible – The book of Colossians – Read Ch. 3 –
memorize *Philippians 4:6*

Reading – Read Chapter 1 & 2 – *Derwood Inc.* and
answer questions

Math – page 328 – Reducing Fractions

Social Studies – Ch. 8 – Read p. 124-128 – Do
Comp. Check 8B

Science – Ch. 4 – Read p. 96-98 & do Comp. Check 4.2

COLOSSIANS

AT-A-GLANCE



N.T. BOOK #12



AUTHOR: APOSTLE PAUL



WRITTEN: 60-62 AD

Old Testament: 39 Books

New Testament: 27 Books

CLAIMS TO FAME: Famous for teaching us to be wary of false teachers.

PROBLEMS OR ISSUES THIS BOOK IS ADDRESSING:

- The Colossian church was trying to mix Greek philosophy with Christian theology. The result was called Gnostic philosophy. Among other things, it taught that the physical world was evil and Jesus was a spirit and not a man.

MOST FAMOUS VERSES:

For in him all things were created: things in heaven and on earth, visible and invisible, whether thrones or powers or rulers or authorities; all things have been created through him and for him. **Colossians 1:16**

Therefore, as God's chosen people, holy and dearly loved, clothe yourselves with compassion, kindness, humility, gentleness and patience. **Colossians 3:12**

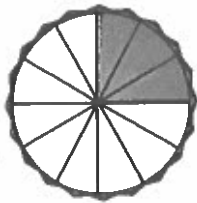
Important Points about the Book:

- Paul begins this book by defending the authority of Jesus and warning against spiritual practices which are not of God. He tells the people that Jesus is divine. They were starting to say what many people say today, that he was simply a great prophet and teacher and there are other paths to contact with God the Father.
- In Chapters 3-4, he teaches the people about love. He feels if they put on the love of Christ they will stop getting distracted by false doctrines. He teaches believers how to live at home, how to manage family matters, and how to get along with other believers in Christ.

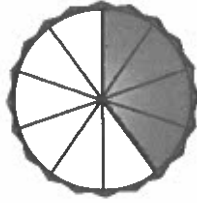
Reducing Fractions

Write *true* or *false*.

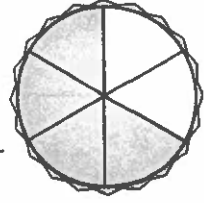
1. $\frac{3}{12} = \frac{1}{4}$



2. $\frac{4}{10} = \frac{1}{2}$



3. $\frac{2}{3} = \frac{4}{6}$



Reduce these fractions to lowest terms by dividing both terms by the greatest common factor.

4. $\frac{18}{30} =$ _____

5. $\frac{8}{12} =$ _____

6. $\frac{6}{24} =$ _____

7. $\frac{5}{100} =$ _____

8. $\frac{3}{9} =$ _____

9. $\frac{12}{20} =$ _____

10. $\frac{12}{14} =$ _____

11. $\frac{30}{55} =$ _____

12. $\frac{15}{20} =$ _____

13. $\frac{12}{16} =$ _____

14. $\frac{18}{27} =$ _____

15. $\frac{54}{63} =$ _____

16. $\frac{15}{21} =$ _____

17. $\frac{6}{30} =$ _____

18. $\frac{2}{18} =$ _____

19. $\frac{4}{22} =$ _____

Proper and Improper Fractions

Circle the denominator of each fraction. Mark under the proper fractions.

20. $\frac{7}{8}$
○

21. $\frac{4}{3}$
○

22. $\frac{2}{2}$
○

23. $\frac{3}{8}$
○

24. $\frac{4}{9}$
○

25. $\frac{6}{5}$
○

26. $\frac{5}{9}$
○

27. $\frac{11}{2}$
○

Change the improper fractions to whole numbers.

28. $\frac{27}{9} =$ _____

29. $\frac{63}{7} =$ _____

30. $\frac{15}{5} =$ _____

31. $\frac{30}{6} =$ _____

32. $\frac{144}{12} =$ _____

33. $\frac{56}{2} =$ _____

Change the improper fractions to mixed numbers.

34. $\frac{17}{8} =$ _____

35. $\frac{23}{4} =$ _____

36. $\frac{17}{7} =$ _____

37. $\frac{125}{11} =$ _____

38. $\frac{32}{5} =$ _____

39. $\frac{64}{9} =$ _____

Change the improper fractions to mixed numbers. Reduce the fractions to lowest terms.

40. $\frac{33}{6} =$ _____

41. $\frac{22}{4} =$ _____

42. $\frac{16}{10} =$ _____

43. $\frac{44}{6} =$ _____

44. $\frac{50}{8} =$ _____

45. $\frac{20}{15} =$ _____

Old World History – Comprehension Check 8B

1. Northern Africa today is inhabited mostly by what group of people?

2. What section of Africa carried on much trade during the Middle ages?

3. Why was Africa called the “White Man’s Grave”?

4. Who was the first European explorer of Africa?

5. What famous Scotsman as one of the first missionaries in South Africa and near what desert did he minister to

the people?

Science – Comprehension Check 4.2

1. Define the following words:

NATURAL RESOURCE:

CONSERVATION:

HUMUS:

SOIL:

2. Classify each weathering agent as either C=Chemical or P=Physical Weathering:

MOSSES _____

LICHENS _____

RAINWATER _____

BLOWING SAND _____

CREEPING GLACIERS _____

GERMINATING SEEDLINGS _____

EXTREME TEMPERATURE CHANGES _____

April 16

Fifth Grade at Home

Bible – the book of 1 Thessalonians – read ch. 4 –
memorize *Philippians 4:6*

Reading – Read Chapter 3 – *Derwood Inc.* and
answer questions

Math – page 329 – Adding Fractions

Social Studies – Ch. 8 – Read p. 128-129 and do
Comp. Check 8C

Science – Ch. 4 – Read p. 98-101 – with your
parent's permission AND help, you can do the
experiment on p. 101

1 THESSALONIANS

AT-A-GLANCE



N.T. BOOK #13



AUTHOR: APOSTLE PAUL



WRITTEN: 51 AD

Old Testament: 39 Books

New Testament: **13** Books

CLAIMS TO FAME: Famous for a verse that talks about Christians meeting Jesus in the sky.

PROBLEMS OR ISSUES THIS BOOK IS ADDRESSING:

- Paul spent around three months in Thessalonica when it was a small and new church. He wanted to check up on their faith, fearing that false teachers might have infiltrated their number. He sent back Timothy, who gave a surprisingly good report. That prompted Paul to write 1 Thessalonians as a letter of encouragement.

MOST FAMOUS VERSES:

Give thanks in all circumstances; for this is God's will for you in Christ Jesus. **1 Thessalonians 5:18**

So then, let us not be like others, who are asleep, but let us be awake and sober. **1 Thessalonians 5:6**

Important Points about the Book:

- Paul uses this book to encourage the church in their pursuit of holiness, diligence, love, and hope. He tells them to walk in the light and makes many mentions of the Second Coming of Jesus.
- One passage, Christians look at a lot today. 1 Thessalonians 4:16 states, "For the Lord himself will come down from heaven, with a loud command, with the voice of the archangel and with the trumpet call of God, and the dead in Christ will rise first." Many Christians hope they are the ones who will get to meet Jesus in the sky. Some feel it will happen before a great period of tribulation. Others feel it is as the Second Coming.

Adding Fractions

$$\begin{array}{r} 1. \ 3 \text{ eighths} \\ \ 3 \text{ eighths} \\ + 1 \text{ eighth} \\ \hline \end{array}$$

$$\begin{array}{r} 2. \ 5 \text{ elevenths} \\ \ 2 \text{ elevenths} \\ + 3 \text{ elevenths} \\ \hline \end{array}$$

$$\begin{array}{r} 3. \ 4 \text{ thirteenths} \\ \ 5 \text{ thirteenths} \\ + 2 \text{ thirteenths} \\ \hline \end{array}$$

$$\begin{array}{r} 4. \ 2 \text{ ninths} \\ \ 2 \text{ ninths} \\ + 3 \text{ ninths} \\ \hline \end{array}$$

$$5. \ \frac{3}{19} + \frac{2}{19} + \frac{4}{19} + \frac{5}{19} = \underline{\hspace{2cm}}$$

$$6. \ \frac{1}{9} + \frac{2}{9} + \frac{4}{9} = \underline{\hspace{2cm}}$$

$$7. \ \frac{7}{23} + \frac{9}{23} = \underline{\hspace{2cm}}$$

$$\begin{array}{r} 8. \ 23\frac{2}{15} \\ \ 52\frac{8}{15} \\ + 16\frac{1}{15} \\ \hline \end{array}$$

$$\begin{array}{r} 9. \ 6\frac{1}{10} \\ \ 9\frac{1}{10} \\ + 4\frac{1}{10} \\ \hline \end{array}$$

$$\begin{array}{r} 10. \ 423\frac{3}{17} \\ \ 784\frac{5}{17} \\ + 95\frac{6}{17} \\ \hline \end{array}$$

$$\begin{array}{r} 11. \ 3,246\frac{1}{5} \\ \ 719\frac{2}{5} \\ + 5,899\frac{1}{5} \\ \hline \end{array}$$

Change the improper fractions and reduce if necessary.

$$\begin{array}{r} 12. \ \frac{3}{8} \\ \ \frac{3}{8} \\ + \frac{5}{8} \\ \hline \end{array}$$

$$\begin{array}{r} 13. \ 19\frac{2}{9} \\ \ 35\frac{2}{9} \\ + 78\frac{7}{9} \\ \hline \end{array}$$

$$\begin{array}{r} 14. \ 104\frac{5}{6} \\ \ 9\frac{5}{6} \\ + 382 \\ \hline \end{array}$$

$$\begin{array}{r} 15. \ 87\frac{7}{15} \\ \ 63\frac{9}{15} \\ + 15\frac{4}{15} \\ \hline \end{array}$$

$$\begin{array}{r} 16. \ 5\frac{3}{10} \\ \ 6\frac{9}{10} \\ + 4\frac{7}{10} \\ \hline \end{array}$$

Find the common denominators before adding.

$$\begin{array}{r} 17. \ \frac{1}{3} \\ \ + \frac{1}{4} \\ \hline \end{array}$$

$$\begin{array}{r} 18. \ \frac{2}{5} \\ \ + \frac{1}{15} \\ \hline \end{array}$$

$$\begin{array}{r} 19. \ 3\frac{5}{8} \\ \ + 2\frac{1}{4} \\ \hline \end{array}$$

$$\begin{array}{r} 20. \ 23\frac{3}{4} \\ \ + 42\frac{2}{3} \\ \hline \end{array}$$

$$\begin{array}{r} 21. \ 14\frac{3}{8} \\ \ 7\frac{5}{8} \\ + 6\frac{1}{4} \\ \hline \end{array}$$

$$\begin{array}{r} 22. \ 8\frac{1}{2} \\ \ 5\frac{2}{3} \\ + 6\frac{1}{6} \\ \hline \end{array}$$

$$\begin{array}{r} 23. \ 15\frac{1}{2} \\ \ 9\frac{1}{3} \\ + 11\frac{1}{4} \\ \hline \end{array}$$

$$\begin{array}{r} 24. \ 17\frac{1}{4} \\ \ 8\frac{5}{6} \\ + 7\frac{2}{3} \\ \hline \end{array}$$

$$25. \ 6\frac{1}{2} + 3\frac{2}{3} = \underline{\hspace{2cm}}$$

$$26. \ 5\frac{5}{8} + 1\frac{1}{4} = \underline{\hspace{2cm}}$$

$$27. \ 7\frac{3}{5} + 2\frac{11}{15} = \underline{\hspace{2cm}}$$

Comprehension Check 8C

- 1. Who was Africa's most famous explorer?**
- 2. What was the "smoke that thunders" and why was it called that?**
- 3. Who went to find and assist Dr. Livingstone?**

April 17

Fifth Grade at Home

Bible – The book of 2 Thessalonians – read ch. 3 –

Write Philippians 4:6 from memory

**Reading – Read Chapter 4 – Derwood Inc. and
answer questions**


Math – page 330 – Subtracting Fractions

**Social Studies – Ch. 8 – Read p. 130-132 (white
parts of pages only)**

**Science – Ch. 4 – Read p. 102-103 & do Comp.
Check 4.3**

III THESSALONIANS

AT-A-GLANCE



N.T. BOOK #14



AUTHOR: APOSTLE PAUL



WRITTEN: 51-52 AD

Old Testament: 39 Books

New Testament: **14** Books

CLAIMS TO FAME: One of a few epistles focusing on the end times.

PROBLEMS OR ISSUES THIS BOOK IS ADDRESSING:

- Paul wrote this letter to speak to the people again about the coming return of Jesus Christ. Some of the believers in that church thought that Jesus had already returned. The letter was penned to correct any misunderstandings.

MOST FAMOUS VERSES:

He called you to this through our gospel, that you might share in the glory of our Lord Jesus Christ. **2 Thessalonians 2:14.**

On the day he comes to be glorified in his holy people and to be marveled at among all those who have believed. This includes you, because you believed our testimony to you. **2 Thessalonians 1:10**

Important Points about the Book:

- In an effort to clear up a misunderstanding that Jesus will be returning immediately or had already returned, Paul explains that the church members should be steadfast in their holiness so that they will be ready when Jesus does come.
- In Chapters 2-3 of this short book, he gives details about Jesus' Second Coming, including some information about the Antichrist, whom he says will come first.

Subtracting Fractions

$$\begin{array}{r} 1. \ 9 \text{ twelfths} \\ - 4 \text{ twelfths} \\ \hline \end{array}$$

$$\begin{array}{r} 2. \ 7 \text{ eighths} \\ - 4 \text{ eighths} \\ \hline \end{array}$$

$$\begin{array}{r} 3. \ 9 \text{ tenths} \\ - 8 \text{ tenths} \\ \hline \end{array}$$

$$\begin{array}{r} 4. \ 14 \text{ fifteenths} \\ - 6 \text{ fifteenths} \\ \hline \end{array}$$

$$5. \ \frac{11}{13} - \frac{5}{13} = \underline{\hspace{2cm}}$$

$$6. \ \frac{12}{17} - \frac{9}{17} = \underline{\hspace{2cm}}$$

$$7. \ \frac{16}{21} - \frac{8}{21} = \underline{\hspace{2cm}}$$

$$8. \ \frac{14}{15} - \frac{3}{15} = \underline{\hspace{2cm}}$$

$$\begin{array}{r} 9. \ 31\frac{4}{5} \\ - 17\frac{1}{5} \\ \hline \end{array}$$

$$\begin{array}{r} 10. \ 103\frac{7}{9} \\ - 68\frac{2}{9} \\ \hline \end{array}$$

$$\begin{array}{r} 11. \ 53\frac{13}{19} \\ - 26\frac{4}{19} \\ \hline \end{array}$$

$$\begin{array}{r} 12. \ 217\frac{10}{13} \\ - 186\frac{3}{13} \\ \hline \end{array}$$

$$\begin{array}{r} 13. \ 500\frac{14}{17} \\ - 176\frac{6}{17} \\ \hline \end{array}$$

Reduce if necessary.

$$\begin{array}{r} 14. \ 15\frac{5}{8} \\ - 6\frac{3}{8} \\ \hline \end{array}$$

$$\begin{array}{r} 15. \ 10\frac{7}{10} \\ - 5\frac{3}{10} \\ \hline \end{array}$$

$$\begin{array}{r} 16. \ 213\frac{11}{15} \\ - 66\frac{8}{15} \\ \hline \end{array}$$

$$\begin{array}{r} 17. \ 121\frac{7}{9} \\ - 75\frac{4}{9} \\ \hline \end{array}$$

$$\begin{array}{r} 18. \ 18\frac{3}{4} \\ - 6\frac{1}{4} \\ \hline \end{array}$$

Find common denominators before subtracting.

$$\begin{array}{r} 19. \ 12\frac{3}{4} \\ - 7\frac{1}{3} \\ \hline \end{array}$$

$$\begin{array}{r} 20. \ 19\frac{5}{8} \\ - 12\frac{1}{6} \\ \hline \end{array}$$

$$\begin{array}{r} 21. \ 108\frac{1}{2} \\ - 29\frac{3}{8} \\ \hline \end{array}$$

$$\begin{array}{r} 22. \ 310\frac{3}{5} \\ - 273\frac{3}{10} \\ \hline \end{array}$$

$$\begin{array}{r} 23. \ 16\frac{5}{6} \\ - 9\frac{2}{3} \\ \hline \end{array}$$

$$\begin{array}{r} 24. \ 500\frac{7}{9} \\ - 125\frac{1}{3} \\ \hline \end{array}$$

$$\begin{array}{r} 25. \ 32\frac{11}{12} \\ - 17\frac{3}{4} \\ \hline \end{array}$$

$$\begin{array}{r} 26. \ 15\frac{2}{3} \\ - 9\frac{1}{5} \\ \hline \end{array}$$

$$\begin{array}{r} 27. \ 126\frac{1}{2} \\ - 87\frac{1}{3} \\ \hline \end{array}$$

$$\begin{array}{r} 28. \ 21\frac{7}{8} \\ - 17\frac{1}{6} \\ \hline \end{array}$$

$$\begin{array}{r} 29. \ 51\frac{5}{6} \\ - 37\frac{2}{9} \\ \hline \end{array}$$

$$\begin{array}{r} 30. \ 45\frac{9}{10} \\ - 19\frac{1}{5} \\ \hline \end{array}$$

$$31. \ 3\frac{2}{5} - 1\frac{2}{15} = \underline{\hspace{2cm}}$$

$$32. \ 15\frac{5}{6} - 14\frac{3}{10} = \underline{\hspace{2cm}}$$

$$33. \ 7\frac{3}{8} - 6\frac{1}{4} = \underline{\hspace{2cm}}$$

Science – Comprehension Check 4.3

1. Identify each rock as either I=Igneous, S=Sedimentary, or M=Metamorphic:

GRANITE _____

PUMICE _____

LIMESTONE _____

SANDSTONE _____

MARBLE _____

SHALE _____

OBSIDIAN _____

SLATE _____

2. Name the rock that best fits each clue:

a. Igneous rock made of several different types and colors

of minerals: _____

b. Is formed from bones and seashells: _____

c. Was once limestone: _____

d. Looks like clear, black glass: _____

e. Smells like mud: _____

f. An igneous rock which floats: _____

g. Was once shale: _____

April 20

Fifth Grade at Home

Bible – Read worksheet on the Apostle Paul and look up scriptures at the bottom of the page. Do the word find “Find the Place Bible Lookup”

Memory Verse – 1 Timothy 4:12

Don't let anyone look down on you because you are young, but set an example for the believers in speech, in conduct, in love, in faith and in purity.

Reading – Read Chapter 5 – *Derwood Inc.* and answer questions

Math – page 331 – Subtracting Fractions with Borrowing

Social Studies – Ch. 8 – Read p. 130-133 (Tan shaded parts of pages only)

Science – Ch. 4 – Read p. 104-105

APOSTLE PAUL

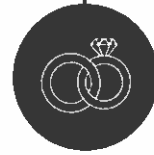
AT-A-GLANCE



CHILDHOOD:

Paul was born with the Jewish name Saul. He was born in Tarsus, a city in northern Israel.

Paul was trained in tent making and also in Jewish scholarship.



MARRIED: UNKNOWN

Birth of Jesus

Birth: Approx. 4 BC

2000's AD

Death: Approx. 62 AD

CLAIMS TO FAME:

- 1 Paul wrote 13 epistles in the New Testament
- 2 Paul was converted and called by Jesus on the road to Damascus, where he was blinded for three days.
- 3 Prior to his conversion, Paul was actively involved in the persecution of Christians and was involved in the stoning of the first martyr for Jesus, Stephen.

FAMOUS QUOTES:

"But God demonstrates his own love for us in this: While we were still sinners, Christ died for us."
Romans 5:8

"Finally, brothers, whatever is true, whatever is noble, whatever is right, whatever is pure, whatever is lovely, whatever is admirable—if anything is excellent or praiseworthy—think about such things."
Philippians 4:8

"For it is by grace you have been saved, through faith—and this not from yourselves, it is the gift of God..."
Ephesians 2:8

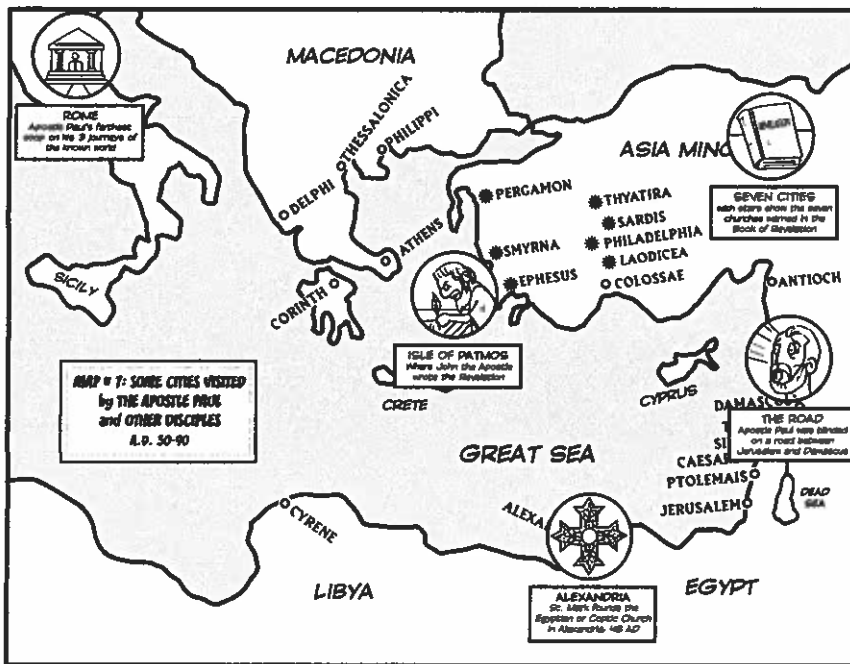


Bible Lookups: Acts 9:1-22, Acts 14:8-20, 2 Corinthians 11:16-33

WORKSHEET 10 FOR STUDENTS: FIND THE PLACE BIBLE LOOKUP

AT-A-GLANCE

When the early churches were first being born, it was an exciting time! Find the places where various disciples traveled or wrote about in the word search. Then, put a star on any you can see on the map! Those places are in red below:



- Antioch
- Armenia
- Athens
- Cesarea
- Colchis
- Corinth
- Crete
- Damascus
- Delphi
- Egypt
- Ethiopia
- Greece
- India
- Laodicea
- Libya
- Philippi
- Ptolemy
- Rome
- Russia
- Sidon
- Smyrna
- Spain
- Tyre

P G C C G E E A H A A Z A I C T P C S H
 E H C R K R G R A I I A Q Y P P O U H C
 E O I B E Y E M W D P Z E Y N L C T S O
 Y M E L O T P E D N O S G R C S N F M I
 V T R B I N E N C I I E E H A I H D Y T
 P S M P Z P I I A E H T I M R S E R R N
 R U S S I A P A J C T S A O O L E A N A
 S N E H T A L I P K E D C E P R P C A S
 L A O D I C E A Y S Q Z K H S I D O N O
 Z O A B W F I J J N I W I P A Y B I L V

Subtracting Fractions with Borrowing

$$\begin{array}{r} 1. \ 1 \\ - \frac{7}{8} \\ \hline \end{array}$$

$$\begin{array}{r} 2. \ 1 \\ - \frac{3}{5} \\ \hline \end{array}$$

$$\begin{array}{r} 3. \ 1 \\ - \frac{5}{11} \\ \hline \end{array}$$

$$\begin{array}{r} 4. \ 1 \\ - \frac{6}{17} \\ \hline \end{array}$$

$$\begin{array}{r} 5. \ 5 \\ - \frac{5}{9} \\ \hline \end{array}$$

$$\begin{array}{r} 6. \ 9 \\ - \frac{3}{8} \\ \hline \end{array}$$

$$\begin{array}{r} 7. \ 38 \\ - 5\frac{1}{5} \\ \hline \end{array}$$

$$\begin{array}{r} 8. \ 26 \\ - 13\frac{7}{10} \\ \hline \end{array}$$

$$\begin{array}{r} 9. \ 104 \\ - 72\frac{1}{4} \\ \hline \end{array}$$

$$\begin{array}{r} 10. \ 71 \\ - 16\frac{4}{11} \\ \hline \end{array}$$

$$\begin{array}{r} 11. \ 215 \\ - 109\frac{2}{9} \\ \hline \end{array}$$

$$\begin{array}{r} 12. \ 321 \\ - 88\frac{11}{16} \\ \hline \end{array}$$

$$\begin{array}{r} 13. \ 9\frac{1}{3} \\ - 7\frac{2}{3} \\ \hline \end{array}$$

$$\begin{array}{r} 14. \ 23\frac{3}{11} \\ - 19\frac{8}{11} \\ \hline \end{array}$$

$$\begin{array}{r} 15. \ 501\frac{3}{8} \\ - 217\frac{7}{8} \\ \hline \end{array}$$

$$\begin{array}{r} 16. \ 11\frac{1}{13} \\ - 8\frac{5}{13} \\ \hline \end{array}$$

Find common denominators before subtracting.

$$\begin{array}{r} 17. \ 3\frac{1}{4} \\ - 2\frac{1}{2} \\ \hline \end{array}$$

$$\begin{array}{r} 18. \ 22\frac{1}{3} \\ - 7\frac{1}{2} \\ \hline \end{array}$$

$$\begin{array}{r} 19. \ 101\frac{1}{6} \\ - 76\frac{3}{8} \\ \hline \end{array}$$

$$\begin{array}{r} 20. \ 64\frac{1}{3} \\ - 18\frac{4}{5} \\ \hline \end{array}$$

$$\begin{array}{r} 21. \ 9\frac{1}{4} \\ - 5\frac{2}{3} \\ \hline \end{array}$$

$$\begin{array}{r} 22. \ 91\frac{1}{2} \\ - 65\frac{4}{5} \\ \hline \end{array}$$

$$\begin{array}{r} 23. \ 12\frac{1}{6} \\ - 8\frac{4}{9} \\ \hline \end{array}$$

$$\begin{array}{r} 24. \ 84\frac{3}{4} \\ - 39\frac{5}{6} \\ \hline \end{array}$$

$$\begin{array}{r} 25. \ 213\frac{3}{8} \\ - 186\frac{3}{4} \\ \hline \end{array}$$

$$26. \ 72\frac{1}{5} - 16\frac{2}{3} = \underline{\hspace{2cm}}$$

$$27. \ 5\frac{1}{2} - 3\frac{3}{5} = \underline{\hspace{2cm}}$$

$$28. \ 100\frac{3}{10} - 17\frac{3}{5} = \underline{\hspace{2cm}}$$

April 21

Fifth Grade at Home

Bible – 1 Timothy – read worksheet and Ch. 4
Recite verse – 1 Timothy 4:12

Reading – Read Chapter 6 – *Derwood Inc.* and
answer questions

Math – page 332 – Multiplying Fractions

Social Studies – Chapter 8 Checkup

Science – Ch. 4 – Read p. 106-108 & do Comp.
Check 4.4



I TIMOTHY

AT-A-GLANCE



N.T. BOOK #15



AUTHOR: APOSTLE PAUL



WRITTEN: 62-64 AD

Old Testament: 39 Books

New Testament: 15 Books

CLAIMS TO FAME: Famous for giving instructions for church leadership.

PROBLEMS OR ISSUES THIS BOOK IS ADDRESSING:

- The letter was addressed to Paul's young disciple Timothy, who may have been experiencing some burnout as most pastors do at times. Paul is encouraging him and advising him.

MOST FAMOUS VERSES:

Don't let anyone look down on you because you are young, but set an example for the believers in speech, in conduct, in love, in faith and in purity. **1 Timothy 4:12**

For the love of money is a root of all kinds of evil. Some people, eager for money, have wandered from the faith and pierced themselves with many griefs. **1 Timothy 6:10**

Important Points about the Book:

- Paul begins 1 Timothy by encouraging him to fight the good fight and not to let his young age be a hindrance.
- He then gives instructions for Timothy about leadership and managing all of the different situations he will encounter in the church community. These passages have been used over the centuries to train people in church leadership.

Multiplying Fractions

1. $\frac{3}{8} \times \frac{1}{7} =$ _____

2. $\frac{2}{9} \times \frac{5}{11} =$ _____

3. $\frac{3}{4} \times \frac{7}{8} =$ _____

4. $\frac{1}{5} \times \frac{2}{3} =$ _____

Reduce products to lowest terms. Use divisibility rules.

5. $\frac{5}{9} \times \frac{3}{10} =$ _____

6. $\frac{3}{8} \times \frac{4}{9} =$ _____

7. $\frac{6}{7} \times \frac{14}{15} =$ _____

8. $\frac{2}{5} \times \frac{15}{16} =$ _____

Use cancellation if possible.

9. $\frac{3}{4} \times \frac{8}{9} =$ _____

10. $\frac{2}{3} \times \frac{9}{10} =$ _____

11. $\frac{5}{7} \times \frac{14}{15} =$ _____

12. $\frac{3}{8} \times \frac{3}{12} =$ _____

13. $7 \times \frac{5}{14} =$ _____

14. $\frac{8}{15} \times 6 =$ _____

15. $\frac{4}{15} \times 10 =$ _____

16. $\frac{2}{3} \times 9 =$ _____

17. $2\frac{3}{8} \times \frac{4}{19} =$ _____

18. $3\frac{3}{5} \times \frac{5}{9} =$ _____

19. $5\frac{7}{9} \times \frac{15}{16} =$ _____

20. $1\frac{7}{8} \times \frac{4}{5} =$ _____

21. $\frac{2}{5} \times 3\frac{3}{4} =$ _____

22. $\frac{4}{7} \times 10\frac{1}{2} =$ _____

23. $\frac{3}{4} \times 15\frac{1}{3} =$ _____

24. $\frac{10}{11} \times 2\frac{1}{5} =$ _____

25. $1\frac{1}{2} \times 2\frac{2}{3} =$ _____

26. $3\frac{2}{5} \times 1\frac{1}{4} =$ _____

27. $2\frac{1}{6} \times 7\frac{1}{5} =$ _____

28. $4\frac{3}{8} \times 3\frac{3}{5} =$ _____

29. $\frac{15}{16} \times \frac{24}{25} =$ _____

30. $15 \times \frac{7}{12} =$ _____

31. $\frac{11}{15} \times 10 =$ _____

32. $1\frac{3}{4} \times \frac{8}{15} =$ _____

33. $5\frac{2}{9} \times 3 =$ _____

34. $1\frac{3}{4} \times 1\frac{1}{3} =$ _____

35. $2\frac{1}{7} \times 1\frac{1}{20} =$ _____

36. $2\frac{2}{5} \times 3\frac{3}{4} =$ _____

Chapter 8 Checkup

B. Who am I?

1. The first recorded African Christian _____
2. An earthly leader of the Ethiopian Orthodox Church _____
3. King who had ten churches carved from solid rock _____
4. One of the greatest leaders in church history, he boldly proclaimed that Jesus is God _____
5. Greek slave who wrote famous fables _____

C. Tell the most important facts about each person:

James Bruce:

Mungo Park:

Robert Moffat:

David Livingstone:

Henry Stanley:

Khama:

Samuel Crowther:

Mary Slessor:

D. Answer each question.

1. What is the second largest continent? _____

2. What narrow waterway separates Africa from Europe?

3. What man-made waterway separates Africa from Asia?

4. What is the fourth largest island in the world? _____

5. What is the world's second largest river in water volume? _____

6. Which country led the way in exploration and evangelization of Africa?

E. Identify the place described by each clue:

1. The "Dark Continent" _____

2. the greatest ancient civilization of Africa's interior _____

3. the first and greatest Christian kingdom of Africa _____

4. the city famous as a center of learning in the Mali Empire _____

5. the largest desert region in Southern Africa _____

6. Africa's largest waterfall, the "smoke that thunders" _____

7. Africa's first black republic _____

Science – Comprehension Check 4.4

1. What is a geode?

2. What is a crystal?

3. What is the difference between a gem and a gemstone?

4. What is the hardest of all substances?

5. What is the rarest gemstone?

6. What gives quartz its color?

April 22

Fifth Grade at Home

Bible – 2 Timothy – read worksheet and Ch. 1
Recite verse – 1 Timothy 4:12

Reading – Read Chapter 7 – *Derwood Inc.* and
answer questions

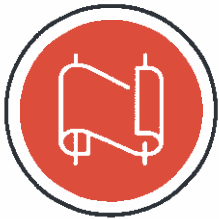
Math – page 334 – Equations

Social Studies – Ch. 9 – Read p. 135-137 & do
Comprehension Check 9A AND read over p. 323

Science – Ch. 4 – Read p. 109-111 & do Comp.
Check 4.5

III TIMOTHY

AT-A-GLANCE



N.T. BOOK #16



AUTHOR: APOSTLE PAUL



WRITTEN: 66-67 AD

Old Testament: 39 Books

New Testament: **16** Books

CLAIMS TO FAME: Gives a glimpse into the end of Paul's life.

PROBLEMS OR ISSUES THIS BOOK IS ADDRESSING:

- This book was the second written to Paul's young disciple Timothy. From the serious nature of this letter, it seems that Paul knew that his work was done and that his life was nearly at an end. Paul was arrested by the Roman Emperor Nero during the time when Nero was being very mean. Paul was martyred, which means he gave up his life for Christ. Nero had him decapitated.

MOST FAMOUS VERSES:

For the Spirit God gave us does not make us timid, but gives us power, love and self-discipline. **2 Timothy 1:7**

Do your best to present yourself to God as one approved, a worker who does not need to be ashamed and who correctly handles the word of truth. **2 Timothy 2:15**

Important Points about the Book:

Paul begins this letter with encouragement for Timothy. Paul is very old and he wants to get in some final instructions and words of encouragement. He reminds Timothy to follow his example and to be steadfast in the trials to come. Paul ends the letter by asking Timothy to visit him because he is very old and would like to see him again before he dies.

Equations

Solve and check.

1. $n + 7 = 15$

2. $n + 5 = 4 \times 3$

3. $n + 8 = \frac{108}{9}$

4. $n - 4 = 3$

5. $n - 11 = \frac{24}{8}$

6. $n - 9 = 6 \times 7$

7. $3n = 21$

8. $7n = 6 + 8$

9. $2n = 5 \times 4$

10. $\frac{n}{5} = 12$

11. $\frac{n}{3} = 5 + 6$

12. $\frac{n}{7} = 15 - 9$

13. $n + 8 = 3 \times 9$

14. $n - 3 = 16 \times 2$

15. $\frac{n}{9} = 21 - 15$

16. $6n = 12 + 12$

17. $\frac{n}{2} = 25 - 6 - 7$

18. $n + 6 = 9 \times 5$

Old World History – Comp. Check 9A

1. At the time of European colonial rule in Africa, what two nations remained independent?
2. What large mountain range is located in northwest Africa?
3. The area of northern Africa known for its fierce pirates was called?

Science - Comprehension Check 4.5

1. Define the following:

MALLEABLE:

DUCTILE:

RADIOACTIVE:

2. Name the metal that best fits each clue:

a. The best low-cost electrical conductor available:

b. A radioactive metal that is the primary source of nuclear power:

c. A lightweight, silvery-colored metal which is rustproof:

d. The best conductor of electricity:

e. A bright yellow metal:

f. The only metal that is liquid at room temperature:

g. The most useful metal:

April 23

Fifth Grade at Home

**Bible – Titus – read worksheet and Ch. 3
Practice saying memory verse**

**Reading – Read Chapter 8 – Derwood Inc. and
answer questions**

Math – page 335 – Decimal Fun

**Social Studies – Ch. 9 – Read p. 138-140 & do
Comprehension Check 9B AND read over p. 323**

**Science – Ch. 4 – Read p. 112-113 (stop before
“Hollowed-out caves”)**

TITUS

AT-A-GLANCE



N.T. BOOK #17



AUTHOR: APOSTLE PAUL



WRITTEN: 62-64 AD

Old Testament: 39 Books

New Testament: 17 Books

CLAIMS TO FAME: Titus is important because it teaches us about redemption and how Jesus becoming human was a necessary step in that process.

PROBLEMS OR ISSUES THIS BOOK IS ADDRESSING:

- Titus was a young pastor being put in charge of the churches at Crete. Paul wrote to encourage him and addressed some of the same problems with leading a church as he addressed with Timothy, his young disciple.

MOST FAMOUS VERSES:

He saved us, not because of righteous things we had done, but because of his mercy. He saved us through the washing of rebirth and renewal by the Holy Spirit. **Titus 3:5**

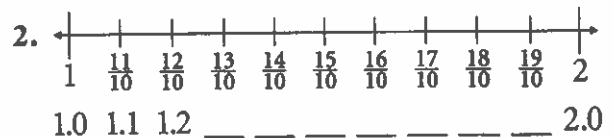
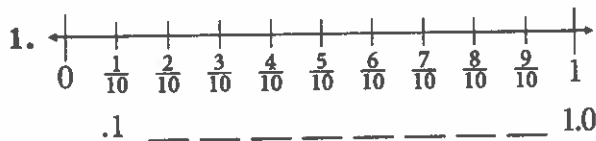
It teaches us to say "No" to ungodliness and worldly passions, and to live self-controlled, upright and godly lives in this present age, **Titus 2:12**

Important Points about the Book:

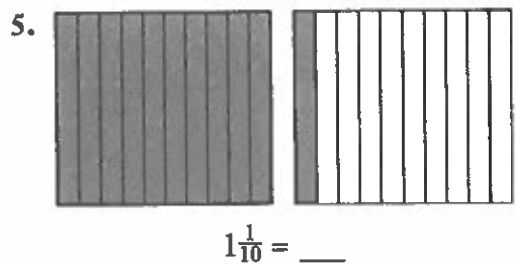
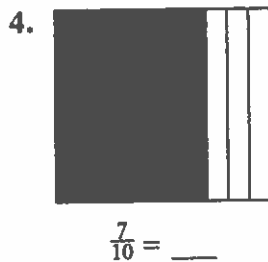
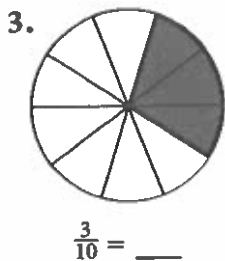
This letter discusses the organization of the church. Paul gives instructions in Chapter 1 about choosing other leaders. In Chapters 2 and 3 of this short book, he teaches how Titus' believers can lead healthy and holy lives.

Decimal Fun

Complete the number line.




Write a decimal for the colored parts.



Write each as a fraction and a decimal.

	fraction	decimal
6. three tenths		
7. one hundredth		
8. twenty-seven hundredths		



Read the mixed decimals and circle the digit in the thousandths' place.

9. 5.321 10. 7.1032 11. 15.429 12. 1.005 13. 3.1631

Write the equivalent decimal for each fraction.

14. $\frac{7}{10} = \underline{\hspace{2cm}}$ 15. $\frac{73}{100} = \underline{\hspace{2cm}}$ 16. $\frac{7}{100} = \underline{\hspace{2cm}}$ 17. $\frac{713}{1,000} = \underline{\hspace{2cm}}$
18. $2\frac{3}{1,000} = \underline{\hspace{2cm}}$ 19. $12\frac{9}{100} = \underline{\hspace{2cm}}$ 20. $11\frac{13}{100} = \underline{\hspace{2cm}}$ 21. $\frac{311}{1,000} = \underline{\hspace{2cm}}$

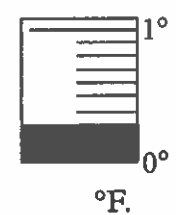
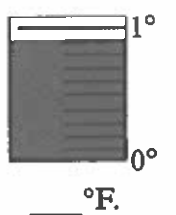
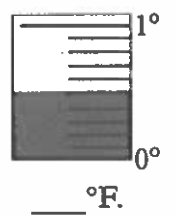
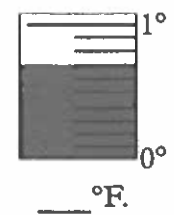
Make both decimals hundredths and write >, <, or =.

22. .3 .29 23. .01 .1 24. .91 .9 25. .1 .11

Write the place-value position of each red digit.

26. 0.42 27. 5.176 28. 3.123 29. 12.007
- _____

Use a decimal to express the temperature.

30.  1°
_____ $^\circ\text{F}$
31.  1°
_____ $^\circ\text{F}$
32.  1°
_____ $^\circ\text{F}$
33.  1°
_____ $^\circ\text{F}$

Old World History – Comp. Check 9B

1. Cairo and Khartoum are the capitals of which two African countries?
2. What was built in Egypt in 1970 that controlled the flooding of the Nile River and provided power for the people's use?
3. What two bodies of water does the Suez Canal connect?
4. What is unique about Egypt's relationship with the nation of Israel?
5. What is the largest African country?
6. What is the world's largest swamp called and in which African country is it located?

April 24

Fifth Grade at Home

Bible – Philemon – read worksheet and entire book... it's a letter... Write your verse from memory

1 Timothy 4:12

Reading – Read Chapter 9 – Derwood Inc. and answer questions

Math – page 336 – Adding & Subtracting Fractions

Social Studies – Ch. 9 – Read p. 140-145 & do Comprehension Check 9C AND read over p. 323

Science – Ch. 4 – Read p. 113-115 & do Comp. Check 4. 6

PHILEMON

AT-A-GLANCE



N.T. BOOK #18



AUTHOR: APOSTLE PAUL



WRITTEN: 60-62 AD

Old Testament: 39 Books

New Testament: 27

18

CLAIMS TO FAME: Written about a slave with encouragement to treat all equally

PROBLEMS OR ISSUES THIS BOOK IS ADDRESSING:

- The book was written so that a slave would be accepted as a beloved brother among Christians, and Paul wanted to encourage Christians to not think in snobbish terms.

MOST FAMOUS VERSES:

No longer as a slave, but better than a slave, as a dear brother. He is very dear to me but even dearer to you, both as a fellow man and as a brother in the Lord. **Philemon 1:16**

I pray that your partnership with us in the faith may be effective in deepening your understanding of every good thing we share for the sake of Christ. **Philemon 1:6**

Important Points about the Book:

- In this letter Paul has found a slave, whom he is returning to Philemon, his owner. Paul asks Philemon to forgive the slave and return him to Paul because Paul has found him useful in preaching the gospel.
- Paul's message is that even though slavery was an accepted part of Roman society, we should treat each other as equals, like he encouraged Philemon to treat his slave as a brother.

Adding Decimals

$$\begin{array}{r} 1. \ 5.9 \\ 7.8 \\ 4.6 \\ +5.9 \\ \hline \end{array}$$

$$\begin{array}{r} 2. \ 2.36 \\ 14.87 \\ 5.79 \\ +58.73 \\ \hline \end{array}$$

$$\begin{array}{r} 3. \ \$56.98 \\ 42.95 \\ 7.88 \\ +96.99 \\ \hline \end{array}$$

$$\begin{array}{r} 4. \ 3.256 \\ 0.493 \\ 8.56 \\ +2.9 \\ \hline \end{array}$$

$$\begin{array}{r} 5. \ 83.015 \\ 9.9 \\ 72.87 \\ +16.342 \\ \hline \end{array}$$

$$6. \ 3.5 + 7.9 = \underline{\hspace{2cm}}$$

$$7. \ 23.87 + 14.96 = \underline{\hspace{2cm}}$$

$$8. \ 5.92 + 13.7 = \underline{\hspace{2cm}}$$

$$9. \ 216.3 + 329.8 = \underline{\hspace{2cm}}$$

$$10. \ 7.8 + 6.9 = \underline{\hspace{2cm}}$$

$$11. \ 5.234 + 1.76 = \underline{\hspace{2cm}}$$

$$\begin{array}{r} 12. \ 7.246 \\ 3.956 \\ 8.076 \\ +0.995 \\ \hline \end{array}$$

$$\begin{array}{r} 13. \ 13.623 \\ 9.807 \\ 25.936 \\ + 7.894 \\ \hline \end{array}$$

$$\begin{array}{r} 14. \ 9.0623 \\ 7.35 \\ 8.432 \\ +0.5 \\ \hline \end{array}$$

$$\begin{array}{r} 15. \ 256.9 \\ 389.1 \\ 642.8 \\ +399.6 \\ \hline \end{array}$$

$$\begin{array}{r} 16. \ 5,087.23 \\ 6,295.19 \\ 726.8 \\ +4,132.66 \\ \hline \end{array}$$

Subtracting Decimals

$$\begin{array}{r} 17. \ 3.6 \\ -2.9 \\ \hline \end{array}$$

$$\begin{array}{r} 18. \ 17.31 \\ - 6.87 \\ \hline \end{array}$$

$$\begin{array}{r} 19. \ 214.6 \\ -187.3 \\ \hline \end{array}$$

$$\begin{array}{r} 20. \ 13.5 \\ - 6.89 \\ \hline \end{array}$$

$$\begin{array}{r} 21. \ 12.5 \\ - 9.5 \\ \hline \end{array}$$

$$22. \ 6.3 - 2.9 = \underline{\hspace{2cm}}$$

$$23. \ 13.1 - 4.87 = \underline{\hspace{2cm}}$$

$$24. \ 3.1 - 2.9 = \underline{\hspace{2cm}}$$

$$25. \ 12.6 - 6.3 = \underline{\hspace{2cm}}$$

$$26. \ 3.216 - 1.199 = \underline{\hspace{2cm}}$$

$$27. \ 18.29 - 6.93 = \underline{\hspace{2cm}}$$

$$\begin{array}{r} 28. \ 3.216 \\ -2.925 \\ \hline \end{array}$$

$$\begin{array}{r} 29. \ 78.5 \\ -62.937 \\ \hline \end{array}$$

$$\begin{array}{r} 30. \ 8.09 \\ -4.723 \\ \hline \end{array}$$

$$\begin{array}{r} 31. \ 19.316 \\ - 7.809 \\ \hline \end{array}$$

$$\begin{array}{r} 32. \ 3.12 \\ -1.544 \\ \hline \end{array}$$

$$\begin{array}{r} 33. \ 82.14 \\ -27.5 \\ \hline \end{array}$$

$$\begin{array}{r} 34. \ 16.11 \\ - 9.18 \\ \hline \end{array}$$

$$\begin{array}{r} 35. \ \$51.19 \\ -25.25 \\ \hline \end{array}$$

$$\begin{array}{r} 36. \ 4.2 \\ -3.716 \\ \hline \end{array}$$

$$\begin{array}{r} 37. \ 5.13 \\ -1.8 \\ \hline \end{array}$$

$$\begin{array}{r} 38. \ 42.136 \\ -26.119 \\ \hline \end{array}$$

$$\begin{array}{r} 39. \ 3.81 \\ -2.87 \\ \hline \end{array}$$

$$\begin{array}{r} 40. \ 16.241 \\ - 7.683 \\ \hline \end{array}$$

$$\begin{array}{r} 41. \ 7.263 \\ -3.582 \\ \hline \end{array}$$

$$\begin{array}{r} 42. \ 91.73 \\ -16.25 \\ \hline \end{array}$$

Old World History – Comp. Check 9C

1. What are the two large lakes located in Eastern Africa?
2. What are these two lakes known for?
3. What dictator took over the country of Congo and renamed it Zaire?
4. After that dictator lost control, what was the country renamed?
5. What are the short descendants of the original inhabitants of this country called?
6. What is the capital of this country?

Science – Comprehension Check 4.6

- 1. How is coal used in the United States?**

- 2. What is oil called when it is in its natural state?**

- 3. How is the water heated in a hot spring?**

- 4. In what kind of rock are most caves found?**

- 5. What is the name for a spring of hot water that spurts from the earth?**

- 6. Name the rock formation that fits each clue:**
 - a. Holds on tightly to the ceiling:**

 - b. Grows up from the ground:**

April 27

Fifth Grade at Home

Bible – Hebrews – read worksheet and Ch. 11 – It tells of many who placed their faith in God!

Memory verse – Hebrews 10:23

Let us hold fast the confession of our hope without wavering,
for he who promised is faithful

Reading – Read Chapter 10 – Derwood Inc. and answer questions

Math – page 338 – Multiplying Decimals

Social Studies – Ch. 9 – Read p. 145-149 & do Comprehension Check 9D AND read over p. 323

Science – Ch. 4 – Read p. 116-118 & do Comp. Check 4.7

HEBREWS

AT-A-GLANCE



N.T. BOOK #19



AUTHOR: UNKNOWN



WRITTEN: AD 67-69

Old Testament: 39 Books

New Testament: 27 Books

19

CLAIMS TO FAME: It is the only book in the New Testament where scholars are unsure of its author. It contains a rundown of Old Testament figures to show how they believed by faith in the Messiah, even though Christ had not come yet.

MOST FAMOUS VERSES:

Now faith is being sure of what we hope for and certain of what we do not see. **Hebrews 11:1**

Therefore, since we are surrounded by such a great cloud of witnesses, let us throw off everything that hinders and the sin that so easily entangles. And let us run with perseverance the race marked out for us... **Hebrews 12:1**

Important Points about the Book:

- The author of Hebrews tried very hard to paint an image of Jesus as divine.
- According to Hebrews, Jesus has a role that is higher than the angels. He has created a clear path to the throne room of God. He is a priest who intercedes to us before the Father. He is the only path to salvation. He was a sacrifice for the sinfulness of mankind. All of these ideas are put forth in Hebrews.
- The book was written around the time when the evil leader Nero was feeding Christians to the lions and other disturbing things. Thus it was a great letter of hope and help for people considering giving up the faith.

Multiplying Decimals

Multiply these decimals by a whole number.

$$\begin{array}{r} 1. \ .23 \\ \times \ 5 \\ \hline \end{array}$$

$$\begin{array}{r} 2. \ 1.06 \\ \times \ 7 \\ \hline \end{array}$$

$$\begin{array}{r} 3. \ 2.007 \\ \times \ 9 \\ \hline \end{array}$$

$$\begin{array}{r} 4. \ \$15.86 \\ \times \ 6 \\ \hline \end{array}$$

$$\begin{array}{r} 5. \ 9.8 \\ \times \ 4 \\ \hline \end{array}$$

$$\begin{array}{r} 6. \ 84.3 \\ \times \ 8 \\ \hline \end{array}$$

$$\begin{array}{r} 7. \ .82 \\ \times 26 \\ \hline \end{array}$$

$$\begin{array}{r} 8. \ 9.8 \\ \times 47 \\ \hline \end{array}$$

$$\begin{array}{r} 9. \ \$1.56 \\ \times 32 \\ \hline \end{array}$$

$$\begin{array}{r} 10. \ 13.76 \\ \times 28 \\ \hline \end{array}$$

$$\begin{array}{r} 11. \ 9.8 \\ \times 17 \\ \hline \end{array}$$

$$\begin{array}{r} 12. \ 8.41 \\ \times 56 \\ \hline \end{array}$$

Multiply these decimals by decimals.

$$\begin{array}{r} 13. \ .29 \\ \times \ .6 \\ \hline \end{array}$$

$$\begin{array}{r} 14. \ 1.3 \\ \times \ .9 \\ \hline \end{array}$$

$$\begin{array}{r} 15. \ 7.25 \\ \times \ .8 \\ \hline \end{array}$$

$$\begin{array}{r} 16. \ .483 \\ \times \ .5 \\ \hline \end{array}$$

$$\begin{array}{r} 17. \ 1.32 \\ \times \ .4 \\ \hline \end{array}$$

$$\begin{array}{r} 18. \ 19.17 \\ \times \ .8 \\ \hline \end{array}$$

$$\begin{array}{r} 19. \ .83 \\ \times 1.6 \\ \hline \end{array}$$

$$\begin{array}{r} 20. \ .25 \\ \times .48 \\ \hline \end{array}$$

$$\begin{array}{r} 21. \ .805 \\ \times .96 \\ \hline \end{array}$$

$$\begin{array}{r} 22. \ 7.32 \\ \times 5.5 \\ \hline \end{array}$$

$$\begin{array}{r} 23. \ 6.4 \\ \times .29 \\ \hline \end{array}$$

$$\begin{array}{r} 24. \ 8.46 \\ \times 3.2 \\ \hline \end{array}$$

Annex zeros to have enough decimal places in the product.

$$\begin{array}{r} 25. \ .11 \\ \times .13 \\ \hline \end{array}$$

$$\begin{array}{r} 26. \ .03 \\ \times .54 \\ \hline \end{array}$$

$$\begin{array}{r} 27. \ .213 \\ \times .05 \\ \hline \end{array}$$

$$\begin{array}{r} 28. \ 3.2 \\ \times .01 \\ \hline \end{array}$$

$$\begin{array}{r} 29. \ .02 \\ \times .03 \\ \hline \end{array}$$

$$\begin{array}{r} 30. \ .81 \\ \times .06 \\ \hline \end{array}$$

Round off the products to the nearest cent (hundredth).

$$\begin{array}{r} 31. \ \$8.29 \\ \times .15 \\ \hline \end{array}$$

$$\begin{array}{r} 32. \ \$12.17 \\ \times 9.5 \\ \hline \end{array}$$

$$\begin{array}{r} 33. \ \$9.50 \\ \times .86 \\ \hline \end{array}$$

$$\begin{array}{r} 34. \ \$5.08 \\ \times .04 \\ \hline \end{array}$$

$$\begin{array}{r} 35. \ \$10.88 \\ \times .37 \\ \hline \end{array}$$

$$\begin{array}{r} 36. \ \$5.95 \\ \times 1.9 \\ \hline \end{array}$$

Old World History – Comp. Check 9D

1. Which Tropical African country was never a European colony?
2. What emperor led this country on a program of modernization?
3. What system of government took over the country and led it away from the progress it had seen?
4. What is the capital of this country?
5. What is the capital of Kenya?
6. Which country contains Mount Kilimanjaro and Africa's three largest lakes?
7. What famous national park is also located there?

Science – Comprehension Check 4.7

1. Give the word that best fits each clue:

a. The preserved remains of plants and animals:

b. The type of rock in which most fossils are formed:

c. The hardened sap in which some insects have been preserved:

d. A scientist who studies fossils:

2. Name two substances in which whole animals have been preserved.

3. When were most fossils probably formed?

4. Name for kinds of fossils:

April 28

Fifth Grade at Home

Bible – James – read worksheet and James 2:14-26 – Recite memory verse Hebrews 10:23

Reading – Read Chapter 11– *Derwood Inc.* and answer questions

Math – page 339 – Rounding off Whole Numbers

Social Studies – Ch. 9 – Read p. 149-153 AND read over p. 323

Science – Ch. 4 – Read p. 119-120

JAMES

AT-A-GLANCE



N.T. BOOK #20



AUTHOR: JAMES,
half-brother of Jesus



WRITTEN: 44-49 AD

Old Testament: 39 Books

New Testament: 27 **20**ks

CLAIMS TO FAME: Written by the half-brother of Jesus. Known as the “Proverbs of the New Testament.”

MOST FAMOUS VERSES:

If any of you lacks wisdom, you should ask God, who gives generously to all without finding fault, and it will be given to you. **James 1:5**

What good is it, my brothers and sisters, if people claim to have faith but have no deeds? Can such faith save them? **James 2:14**

Important Points about the Book:

- James was not a follower of Jesus during the Savior's time on earth. In fact, Mark 3:21 has the half-brothers of Jesus during his early ministry thinking Jesus was “out of his mind.”
- James finally became a believer upon seeing Jesus alive and well after the crucifixion. He became one of the leaders of the church at Jerusalem.
- This book is overflowing with wisdom and is often thought to be among the first books that Christians read after the Gospel of John.

Rounding off Whole Numbers

Draw and label points on the number line to show the approximate location of the numbers.



1. 23 2. 17 3. 65 4. 49 5. 11 6. 27 7. 51 8. 32

Use the points on the number line to round off these numbers to the nearest ten. Remember to round up if the point is halfway between two tens.

9. 23 10. 17 11. 65 12. 49 13. 11 14. 27 15. 51 16. 32

Complete this chart.



	Number	Between which Two Tens	Closer to which Ten	Rounded to
17.	73			
18.	16			
19.	48			
20.	21			
21.	57			
22.	34			
23.	12			

Round to the nearest hundred. Use the rounding rule.

24. 346 _____ 25. 259 _____ 26. 108 _____ 27. 925 _____
 28. 871 _____ 29. 193 _____ 30. 460 _____ 31. 985 _____

Round to the nearest thousand. Use the rounding rule.

32. 5,284 _____ 33. 9,401 _____ 34. 3,821 _____ 35. 6,900 _____ 36. 1,511 _____

Round to the nearest million. Use the rounding rule.

37. 5,555,555 _____ 38. 2,199,987 _____ 39. 6,504,239 _____ 40. 999,999 _____ 41. 2,387,269 _____

April 29

Fifth Grade at Home

**Bible – 1 Peter – read worksheet and 1 Peter Ch. 1
Recite memory verse Hebrews 10:23**

**Reading – Read Chapter 12– Derwood Inc. and
answer questions**

Math – page 344 – Story Problem Fun – Do #1-7

**Social Studies – Do Chapter 9 Checkup (first
page)**

Science – Ch. 4 – Read p. 121

I PETER

AT-A-GLANCE



N.T. BOOK #21



AUTHOR: APOSTLE PETER



WRITTEN: 64 AD

Old Testament: 39 Books

New Testament: 27 Books

21

CLAIMS TO FAME: Is considered a great source to read when you are being picked on, bullied, or persecuted for your faith.

PROBLEMS OR ISSUES THIS BOOK IS ADDRESSING:

Peter wrote the letter during Nero's reign. Nero was the Roman Emperor in the 60s AD, and he hated Christianity. He eventually did horrible things like throw Christians to lions to be eaten. He was addressing both Jews and Gentiles with encouragement to stay the course with Jesus, no matter what happened.

MOST FAMOUS VERSES:

Be alert and of sober mind. Your enemy the devil prowls around like a roaring lion looking for someone to devour. **1 Peter 5:8**


Important Points about the Book:

Jesus becomes the source of example and source of strength when we come into trials and tribulations. By allowing God to help you in your perseverance and work of Christ, we can always have hope in the midst of our suffering.

Story Problem Fun

(More challenging problems are marked with an asterisk *.)

1. According to a precipitation map, Central Africa receives around 80 inches of precipitation annually (each year). Northern Africa receives around 10 inches. How many more inches of precipitation does Central Africa receive annually than Northern Africa?
2. One day the high temperature in the equatorial zone of Africa was 91°F . During the night, the temperature dropped 12°F . What was the low temperature for the night?
3. Deserts cover two fifths of Africa. Grasslands, called savannas, cover another two fifths of Africa. What fraction of Africa is neither deserts nor savannas?
4. The highest point in Africa is Mt. Kilimanjaro, which is 19,340 feet above sea level. The lowest point is Zattara Depression, which is 436 feet below sea level. Find the range from the highest point to the lowest point by adding 19,340 feet and 436 feet.
5. The diameter of the earth is about 8,000 miles. Convert 8,000 miles to yards.
6. For his book report, Nicholas read a book about David Livingstone, Scottish missionary and explorer in Africa. Nicholas read one eighth of the book on Monday, one sixth on Tuesday, and one twelfth on Wednesday. Did he read at least one half of the book during the three days?
7. The earth is approximately 6,000 years old. Since there are 1,000 years in a millennium, how many millenniums old is the earth?
8. The great pyramid built for King Khufu is over four hundred eighty feet tall. How many yards is four hundred eighty feet?
9. Each stone in King Khufu's pyramid weighs $2\frac{1}{2}$ tons. How many tons do 50 of these stones weigh?
10. The Egyptians used two million, three hundred thousand stones to build King Khufu's pyramid. Write the number that is five hundred thousand, fifty less than the number of stones used.
11. Mr. and Mrs. Grant spent thirteen days touring Europe. The total cost of the trip for both was \$8,502. What was the average cost per day?
12. Forty-eight tourists, including Mr. and Mrs. Grant, were in the tour group. If one fourth of the group attend Bible Baptist Church, how many in the tour group do not attend Bible Baptist Church?
- *13. The Grants bought souvenirs for their five grandchildren. The average cost of the souvenirs for the four grandsons was \$28. They spent a total of \$150. How much did they spend on souvenirs for their granddaughter?



Old World History – Chapter 9 Checkup

Name the Capitals of Each African Country (page 323 will help)

EGYPT –

SUDAN –

KENYA –

TANZANIA –

SOUTH AFRICA –

ETHIOPIA –

DEMOCRATIC REPUBLIC OF CONGO –

Who am I?

1. The Egyptian president who took over the Suez Canal by force?

2. The Egyptian president who was the first head of an Arab state to make peace with Israel?

3. Ethiopian ruler who tried to modernize his country but was defeated by Communism?

4. First president of Kenya?

5. First black president of South Africa?

6. Leader who brought Communism to Tanzania?

7. Leader who changed the name of his country to Zaire; when he was overthrown it became the Democratic Republic of Congo?

April 30

Fifth Grade at Home

Bible – 2 Peter – read worksheet and 2Peter ch. 3
Practice memory verse -Hebrews 10:23

Reading – Read Chapter 13– *Derwood Inc.* and
answer questions

Math – page 344 – Story Problem Fun – Do #8-13

Social Studies – Finish Chapter Checkup

Science – Chapter 4 Checkup – do the first three
pages

III PETER

AT-A-GLANCE



N.T. BOOK #22



AUTHOR: APOSTLE PETER



WRITTEN: 67 AD

Old Testament: 39 Books

New Testament: 27 Books

22

CLAIMS TO FAME: Contains the famous verse encouraging Christians to be patient for God's coming: "A 1,000 years is a day to God."

PROBLEMS OR ISSUES THIS BOOK IS ADDRESSING:

Peter appeared to have heard reports that false teachers had arisen in Asia Minor. He wrote the book partly to discourage people from listening to them, and also to continue encouraging them, though the time under Roman Emperor Nero had grown very tough on Christians. Hence, he talked about the Lord's return and how grand it would be if the people would hang in there.

MOST FAMOUS VERSES:

The Lord is not slow in keeping his promise, as some understand slowness. Instead he is patient with you, not wanting anyone to perish, but everyone to come to repentance. **2 Peter 3:9**

But the day of the Lord will come like a thief. The heavens will disappear with a roar; the elements will be destroyed by fire, and the earth and everything done in it will be laid bare. **2 Peter 3:10**

Important Points about the Book:

- Peter wanted to accomplish two things in this book. The first was to encourage people not to listen to false teachers. The second was to encourage them to continue on in the faith, no matter what persecution they came into. He gave a great image of the Day of the Lord, when he said the heavenlies would burn up, but we would be given a new heaven and a new earth.

Answer each question:

1. What African nation has been independent for over 2,000 years?
2. What is the largest country in Africa?
3. What is the world's largest swamp?
4. What is the largest city in Africa?
5. What structure was built to control flooding along the Nile?
6. Name the area along the Mediterranean Sea that was famous for its fierce pirates?
7. What is the world's second largest freshwater lake?
8. What is the world's longest and second deepest freshwater lake?
9. What is Africa's highest mountain peak?
10. What man-made waterway connects the Mediterranean Sea and Red Sea?
11. What large national park is located in Tanzania?
12. Who are the very short people descended from the original inhabitants of the Democratic Republic of Congo?
13. Who were the Dutch farmers of South Africa that were later called Afrikaaners?

14. What organization consists of Great Britain and 52 former British colonies?
15. Which Arab nation was the first to make peace with Israel?
16. What mountain range is located along Africa's northwestern coast?
17. What mountain range is located along Africa's southeastern coast?

In complete sentences, tell about THREE of modern Africa's needs:

Science – Chapter 4 Checkup

Give the definition for the following types of rock and name characteristics of each:

IGNEOUS:

SEDIMENTARY:

METAMORPHIC:

Identify three layers of the earth and tell if that layer is solid, liquid, or both:

1.

2.

3.

Define the following terms:

GEOLOGIST:

BEDROCK:

MAGMA:

LAVA:

WEATHERING:

NATURAL RESOURCE:

HUMUS:

MINERAL:

CRYSTAL:

GEODE:

GEMSTONE:

MINERALOGIST:

STALACTITE:

STALAGMITE:

PETROLEUM:

COAL:

FOSSIL:

PALEONTOLOGIST:

Answer each question:

- 1. What is soil?**
- 2. Name two ways in which physical weathering breaks or wears down rock.**
- 3. How does quartz get its color?**
- 4. What is the name for plant and animal remains that have been turned to stone?**

May 1

Fifth Grade at Home

Bible – 1 John – read worksheet and Ch. 1
Write Hebrews 10:23 from memory

Reading – Read Chapter 14– *Derwood Inc.* and
answer questions

Math – page 345 – More Story Problems – do #14-
23

Social Studies - none

Science – finish chapter checkup

I JOHN

AT-A-GLANCE



N.T. BOOK #23



AUTHOR: JOHN THE APOSTLE



WRITTEN: 90-95 AD

Old Testament: 39 Books

New Testament: 27 Books

23

CLAIMS TO FAME: The first epistle by Jesus' closest disciple, according to many.

PROBLEMS OR ISSUES THIS BOOK IS ADDRESSING:

1 John was written to combat false teachings called "Gnosticism." Gnostics taught that Jesus was a spirit and never really had a body and other errors. Teachings like this created imbalance in believers that could spoil their faith.

MOST FAMOUS VERSES:

If we claim to be without sin, we deceive ourselves and the truth is not in us. If we confess our sins, he is faithful and just and will forgive us our sins and purify us from all unrighteousness. **1 John 1:8-9**

Dear friends, let us love one another, for love comes from God. Everyone who loves has been born of God and knows God. **1 John 4:7**

Important Points about the Book:

- John wanted people to know that love is most important. Love comes from God. When we feel it, we know that God is near. He also wanted people to know that it is important not to listen to false teachers.

14. The offering for Grace Church was \$53,209 in October. The offering was one thousand more dollars in November than in October. What was the offering for November? The offering for December was one hundred dollars less than the offering in October. What was the offering for December?

15. Morgan bought 5 pounds of apples and 3 pounds of pears. Apples cost \$1.15 per pound, peaches cost \$1.45 per pound, and pears cost \$1.14 per pound. What was Morgan's total cost for the fruit?

*16. Tom Williams pays 5¢ per minute to his long distance carrier for calls on Sunday. Last Sunday, he talked long distance to his mother for $2\frac{1}{2}$ hours. How much less than ten dollars did the call cost him?

17. Use order of operations to simplify $15 + 2 + 6 \times 2 \div 3$. Order of operations says that multiplication and division must be done before addition and subtraction. Multiplication and division must be done in the order they appear, reading from left to right.


18. Mr. Hedquist bought rulers for each student in his class at Faith Christian Academy. He has 30 students, and each ruler cost 50¢. Mark beside the number sentence used to find the total cost.

$30 \times \square = \$50$ ○

$\$.50 \div 30 = \square$ ○

$30 \times \$.50 = \square$ ○

$\$.50 \times \square = 30$ ○



19. Jayla sold 15 boxes of candy during the candy sale. Sarah sold 5 more boxes than two times as many boxes as Jayla. Mark beside the number sentence used to find the number of boxes Sarah sold.

$(15 + 5) \times 2 = \square$ ○

$(15 \times 2) + 5 = \square$ ○

$(15 - 5) \div 2 = \square$ ○

$(15 + 5) \div 2 = \square$ ○

20. A bag of miniature candy bars contains 40 bars. Eight students plan to share them equally. Mark beside the number sentence used to find the bars each child receives.

$8 + \square = 40$ ○

$40 \times 8 = \square$ ○

$40 \div 8 = \square$ ○

$40 - \square = 8$ ○

21. A certain battery is sold 4 to a package. Each package costs \$4.00. Mark beside the number sentence used to show the cost of 24 batteries.

$(24 - 4) \times \$4 = \square$ ○

$(24 \div 4) \times \$4 = \square$ ○

$(24 \times \square) + 4 = \4 ○

$(24 \times \$4) - 4 = \square$ ○

*22. Miss Potter's science book is open on her desk, and the product of the two pages showing is 342. What is the page number of the right-hand page? (The right-hand page is always the odd-numbered page.)

*23. Electricity is paid for by the kilowatt-hour (the amount of electricity used by a 1,000-watt appliance for 1 hour). If the electric company charges 8¢ per kilowatt-hour, find the cost to burn a 100-watt bulb for 5 days.

5. Name the famous geyser in Yellowstone National Park.

6. How is a cave formed?

7. Why are rocks found near a river delta usually sedimentary rocks?

8. How does a geyser work?

Identify the rock, mineral, or metal described by each clue.

1. A rock that floats:

2. The hardest substance:

3. Most of the rock deep below the surface of the land:

4. The only metal which is liquid at room temperature:

5. The rarest gemstone:

6. Was once limestone:

7. The best conductor of electricity:

- 8. The best low-cost electrical conductor available:**
- 9. A soft, yellow metal that can be hammered into thin sheets:**
- 10. A radioactive metal which is the primary source of nuclear power:**
- 11. A metal that is lightweight, rustproof, silvery-colored, and non-magnetic:**
- 12. The mineral with crystals that break into flat sheets:**
- 13. Mineral used as pencil "lead":**
- 14. rock formed from the shells of sea creatures:**
- 15. was once shale:**
- 16. the most useful metal:**
- 17. volcanic glass:**
- 18. a rock that is made of sand:**
- 19. a rock that smells like mud when it gets wet:**

Answer each puzzle

- 1. you are looking at pictures of a volcano erupting in Hawaii. What rocks would you expect to find when the lava is cooled?**
- 2. While visiting a museum, you notice a beautiful granite monument. How was the granite for the monument formed?**
- 3. In your rock collection, you have a piece of limestone and a piece of marble. You notice that they have different textures and weights, and yet you know that e marble was at on time limestone. Why are the textures and weights different?**